
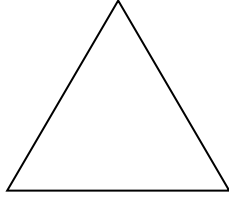

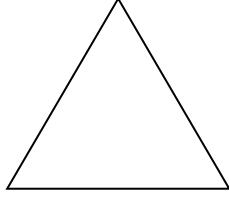


BÜTÜN YARIM ÇEYREK ETKİNLİĞİ


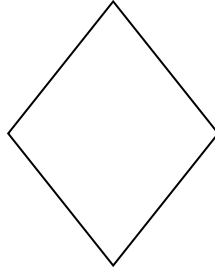
1. Aşağıdaki şekillerin bütünü boyyalım.




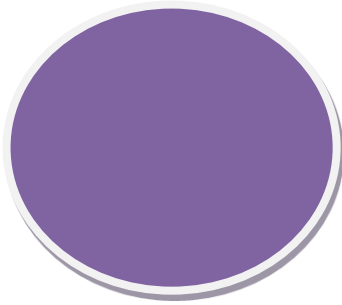
2. Aşağıdaki şekillerin yarısını çizip boyyalım.



3. Aşağıdaki şekillerin çeyreğini çizip boyyalım.





4. Aşağıdaki şekillerin ne kadarının boyandığını altlarına yazalım.



.....

.....

.....



.....

.....

.....